


V. R. SENIOR  
SECONDARY SCHOOL

**SUMMER**  
**HOLIDAY**  
**HOMEWORK**

**CLASS 4**



Name : \_\_\_\_\_  
Class : \_\_\_\_\_  
Section : \_\_\_\_\_  
Roll No. : \_\_\_\_\_

## **INSTRUCTIONS FOR THE PARENTS**

Dear parents,

Warm greetings!

Holidays are time when you can connect with your child in many ways. Parents are the first and the most important teacher for a child. You can encourage your child to participate in many educational activities at home and promote his/her quests to learn while working together as it will not only help your child to build, learn and develop his/her skills but also strengthen your bond with him/her .

Homework has to be done under the parents' guidance. Make him/her read daily one or two pages from their books. Don't miss to take your child outdoors in the evening.

Fix up a timetable for your child to organize his/her daily routine like watching television, mobile surfing for information, playing with friends, studying, etc. Dictate them whatever they have read or written.

Make your child responsible by assigning some of the household responsibilities like watering plants, arranging the dining table, organize their room and fill the empty water bottles and put them in refrigerator.

Encourage your child to eat healthy food, avoid eating junk food, wear clean clothes, wash hands before and after every meal, trim their nails. Let them play and share their stories with their grandparents.

Above mentioned guidelines will help your child to become a smart and an active learner.

## **INSTRUCTIONS FOR THE STUDENTS**

1. Get up early in the morning.
2. Wish your parents, grandparents and elders.
3. Pray to God daily.
4. Exercise everyday.
5. Brush your teeth twice a day in the morning and before bedtime.
6. Stay clean and healthy.
7. Do not play in the sunshine or at hot places.
8. Keep some water and food for birds.
9. Help the poor by giving them food, clothes or money.
10. Wash your hands with soap.
11. Do not waste water and electricity .
12. Do your vacation work by yourself.
13. Writing should be very neat and clean.
14. Try to do your written work regularly to enhance your writing skill.
15. Do one page of your English and Hindi writing books once a week.
16. Read your chapters loudly.

**NOTE- Homework should be done neatly on a separate notebook.**

# SUBJECT:-ENGLISH

## WORKSHEET:-1

### ADJECTIVES WORD SEARCH

Find the adjectives in the grid below.

s	e	p	q	w	e	l	b	n	x	y	n	u	v	u
r	u	w	t	l	h	l	a	b	u	o	v	s	z	p
s	n	p	i	o	e	i	r	r	u	d	e	n	l	r
b	m	p	n	n	e	r	t	l	g	s	f	x	v	e
i	l	a	y	g	y	b	n	e	y	e	h	c	o	t
t	o	u	l	c	o	v	e	h	k	i	d	o	g	t
a	l	c	e	l	u	m	i	a	t	g	e	e	r	y
l	d	f	y	p	n	u	s	n	u	e	i	a	e	t
l	b	b	i	w	g	p	r	e	t	t	y	l	r	i
b	l	a	c	k	t	h	i	c	k	a	i	f	a	t
h	a	n	d	s	o	m	e	l	i	u	u	f	c	g
m	i	o	r	a	n	g	e	r	t	h	i	n	u	d
e	e	i	y	f	h	r	w	t	a	q	l	y	t	l
i	s	a	b	i	g	j	f	r	i	s	h	d	e	f

big  
small  
tall  
short  
long

beautiful  
handsome  
pretty  
cute  
old

young  
large  
tiny  
fat  
thin

blue  
orange  
black  
white

# SUBJECT:-ENGLISH

## WORKSHEET:-2

### Common Nouns or Proper Nouns

Write "common" or "proper" next to each noun.

- |                     |       |                  |       |
|---------------------|-------|------------------|-------|
| 1. mirror           | _____ | 16. Rebecca      | _____ |
| 2. Bella            | _____ | 17. car          | _____ |
| 3. The Great Wall   | _____ | 18. toy          | _____ |
| 4. country          | _____ | 19. Mr. Higgins  | _____ |
| 5. door             | _____ | 20. park         | _____ |
| 6. head             | _____ | 21. California   | _____ |
| 7. The Mighty Ducks | _____ | 22. McDonald's   | _____ |
| 8. train            | _____ | 23. class        | _____ |
| 9. boat             | _____ | 24. teacher      | _____ |
| 10. The Titanic     | _____ | 25. Central Park | _____ |
| 11. knee            | _____ | 26. Hudson River | _____ |
| 12. Maya            | _____ | 27. Leo          | _____ |
| 13. bee             | _____ | 28. school       | _____ |
| 14. Metro Police    | _____ | 29. Ms. Elliot   | _____ |
| 15. carpet          | _____ | 30. bus          | _____ |





## SUBJECT:-ENGLISH WORKSHEET:-3

Fill in the blanks with the most suitable adjectives.

cold	colorful	sweet	quiet	funny
tall	poisonous	narrow	spicy	clean

1. The snake is \_\_\_\_\_.
2. The brownie is too \_\_\_\_\_.
3. The floor is \_\_\_\_\_.
4. The clown is \_\_\_\_\_.
5. The red pepper is \_\_\_\_\_.
6. The ice cream is \_\_\_\_\_.
7. The library is \_\_\_\_\_.
8. The door is too \_\_\_\_\_.
9. The tree is \_\_\_\_\_.
10. The rainbow is \_\_\_\_\_.



# SUBJECT:-ENGLISH

## WORKSHEET:-4



Rearrange the words to make a correct sentence.

Don't forget to start with a capital letter and end with a period (.)

1. is / this / pencil / my

-----

2. cat / the / sleeping / is

-----

3. run / I / fast / can

-----

4. book / I / a / reading / am

-----

5. likes / she / apples

-----

6. are / playing / we / outside

-----

7. he / ball / kicks / the

-----

8. my / sister / is / singing


-----

9. go / to / we / school

-----

10. you / how / are

-----





# SUBJECT:-ENGLISH WORKSHEET:-5



Verbs are action words.  
They mean 'doing' something.



## Circle the verbs.

lives

like

dance

went

kitten

sleeps

baby

sofa

sing

drink

eats

cooked

eight

red

bike

reads

## Complete the sentences from the verbs above.


1. We \_\_\_\_\_ to the sports center in town.
2. My friend and I \_\_\_\_\_ playing volleyball.
3. Jane \_\_\_\_\_ comics on Sundays.
4. Dad \_\_\_\_\_ dinner yesterday.
5. My grandma \_\_\_\_\_ nearby.
6. Her cat \_\_\_\_\_ on the sofa.
7. I \_\_\_\_\_ milk every day.
8. The boy can \_\_\_\_\_.



# WORKSHEET NO- 1

## मेरा परिवार

अपने परिवार के सदस्यों का चित्र चिपकाएं और उनकी आयु, रूप, व्यक्तित्व, पसंद-नापसंद का वर्णन करें।




---

---

---

---




---

---

---

---




---

---

---

---




---

---

---

---




---

---

---

---



---

---

---

---

# WORKSHEET NO - 2

## हिंदी कार्य अभ्यास

### संज्ञा

क शब्दों में से व्यक्ति, वस्तु, स्थान, प्राणी और भाव संज्ञा शब्दों को छाँटकर लिखिए।  
दादाजी किताब हरियाली लड़की मोना दिल्ली गुड़िया घर  
सचिन तेंदुलकर चिड़िया राघव बस्ता सड़क मिठास शेर गुब्बारा  
पार्क कुरता चूहा खुशी स्कूल डर तितली मोर दर्द

व्यक्ति	वस्तु	स्थान	प्राणी	भाव

ख शब्दों में से व्यक्ति, वस्तु, स्थान, प्राणी और भाव संज्ञा शब्दों को छाँटकर लिखिए।  
गायक वीरता जंगल जीत हथिनी सुरीला कलम  
जापान मॉल कश्मीर छात्रा कुत्ता पाठशाला बिल्ला  
दूध बंदर बुढ़ापा नानी बच्चों गिलास हलवाई  
जलेबियाँ साँप हार मोबाइल

व्यक्ति	वस्तु	स्थान	प्राणी	भाव

# WORKSHEET No -3

## वर्ग पहेली

निम्न वर्ग पहेली में बाईं और दिए निर्देश के अनुसार वर्ग पहेली पूरी करो -

1. वर्णों का समूह

1			2
---	--	--	---

2. ललाइन का पुल्लिंग शब्द

3			4
---	--	--	---

3. रात में गाँवों में रोशनी देने वाला

--	--	--	--

4. आँख का पर्यायवाची

5	6		
---	---	--	--

5. ईद के पहले वाला महीना

--	--	--	--

6. दानेदार/फलियों वाली सब्जी

7		8		
---	--	---	--	--

7. राखी का त्योहार

--	--	--	--

8. वानर का तत्सम शब्द

9	10	
---	----	--

9. विश्व का पर्याय

--	--	--	--

10. समुद्र का तत्सम

11	12		
----	----	--	--

11. अर्ह की भाववाचक संज्ञा

--	--	--	--

12. हंस का स्त्रीलिंग

13			
----	--	--	--

13. नीला है कंठ जिसका

# WORKSHEET No- 4

## प्रत्यय

नीचे दिए गए शब्दों में प्रत्यय शब्द जोड़कर नए शब्द बनाइये ।

लिखा + ई = \_\_\_\_\_

तोड़ + ई = \_\_\_\_\_

पढ़ा + ई = \_\_\_\_\_

हिला + ई = \_\_\_\_\_

हँसा + ई = \_\_\_\_\_

कूदा + ई = \_\_\_\_\_

नचा + ई = \_\_\_\_\_

अच्छा + ई = \_\_\_\_\_

बुरा + ई = \_\_\_\_\_

भला + ई = \_\_\_\_\_

महंगा + ई = \_\_\_\_\_

सींचा + ई = \_\_\_\_\_

भूला + ई = \_\_\_\_\_

हसा + ई = \_\_\_\_\_

रो + ई = \_\_\_\_\_

कटा + ई = \_\_\_\_\_

सो + ई = \_\_\_\_\_

मीठा + ई = \_\_\_\_\_

बुला + ई = \_\_\_\_\_

बुना + ई = \_\_\_\_\_

खींच + ई = \_\_\_\_\_

रला + ई = \_\_\_\_\_

# WORKSHEET NO - 5

## सच्ची दोस्ती

नीचे दिए गयी कहानियों को ध्यान से पढ़ कर उत्तर लिखिए ।

राजू और मोहन बहुत अच्छे दोस्त थे। एक दिन वे जंगल में घूम रहे थे। अचानक एक भालू आ गया। मोहन तुरंत पेड़ पर चढ़ गया, लेकिन राजू को चढ़ना नहीं आता था। उसने जमीन पर लेटकर सांस रोक ली। भालू ने उसे सूंघा और चला गया। मोहन ने पूछा, "भालू ने क्या कहा?" राजू ने हंसकर कहा, "सच्चे दोस्त मुसीबत में साथ नहीं छोड़ते!"



### प्रश्न:

1. राजू और मोहन कहाँ घूम रहे थे?

उत्तर: \_\_\_\_\_

2. मोहन ने क्या किया जब भालू आया?

उत्तर: \_\_\_\_\_

3. राजू ने भालू से कैसे बचाव किया?

उत्तर: \_\_\_\_\_

4. इस कहानी से क्या सीख मिलती है?

उत्तर: \_\_\_\_\_

# Tick the correct answer:

1. A pen costs 5 rupees. 3 pens will cost \_\_\_\_\_ rupees.

- a) 5                      b) 10                      c) 15                      d) 20

2. If  $5 \times y = 50$ , then  $y$  is \_\_\_\_\_.

- a) 50                      b) 20                      c) 10                      d) 5

3. The product of 20 and 0 is \_\_\_\_\_.

- a) 20                      b) 0                      c) 1                      d) 100

4.  $2 \times 50 \times 5 \times 20 =$  \_\_\_\_\_.

- a) 10000                      b) 1000                      c) 50000                      d) 5000

5. The smallest odd multiple of 3 is \_\_\_\_\_.

- a) 6                      b) 9                      c) 3                      d) 15



# WORD PROBLEMS:

**1** Roni had 114 cricket cards. He kept 10 and shared the rest among his 8 friends equally. How many cricket cards did each friend get?



**2** Ms. Sharma baked 3 trays of 36 mini-cakes. After they cooled she divided the mini cakes evenly into 4 bags. How many mini-cakes did Ms. Sharma place in each bag?



**3** The total number of students in a school is 9870. If the number of girls is 6820, find the number of boys in the school.



# FILL IN THE BLANKS!

1 If we subtract 1 from a number the answer will be its \_\_\_\_\_.



2 The place value of 8 in 1,28,937 is \_\_\_\_\_.


3 A cuboidal box has \_\_\_\_\_ corners.

4  $7600\text{g} = \text{_____ kg} + \text{_____ g}$ .

5  $1000 \div 10 = \text{_____}$ .

6  $713 \times 5 = 5 \times \text{_____}$ .


7 To make 1357 divisible by 3, the smallest number that needs to be added to it is \_\_\_\_\_.



8  $810 \div 90 \times 12 = \text{_____}$ .

9 \_\_\_\_\_ is the greatest 5-digit number that is divisible by 5.

10 12 dozen bananas = \_\_\_\_\_ bananas.



# MATCH THE FOLLOWING:

1 Straight angle

2 15

3 Reflex angle

4 Acute angle

5 35

6 Fifty-eight thousand eight hundred fifteen

7 4L

8 17 o'clock

a 58,815

b Multiple of 7

c Half of a revolution


d 4000 milliliters

e 5 o'clock

f 1000 milliliters

g Less than one-fourth of a revolution

h Factor of 30



**CLASS-IV**  
**HOLIDAY HOMEWORK**  
**SUBJECT - SCIENCE**

• **ACTIVITY**

- Q-1. Draw our solar system in your notebook and write the names of each Planet.
- Q-2. Paste ten different types of leaf in your notebook. Write the name of the plant. Also note down its type of venation (parallel/reticulate) and chromatography.
- Q-3. Paste two pictures of Herbivores, Carnivores and Omnivores. Write the Names of those animals.
- Q-4. Draw a plate and include.  
Fruits, Vegetables, Milk products  
Design calligraphic quote- "BALANCED DIET KEEPS US HEALTHY".

• **CONDUCT AN EXPERIMENT AS PER INSTRUCTIONS:-**

Procedure:

1. Take a glass and fill it with water
2. Add 2 teaspoons of sugar into the water
3. Stir the water using a spoon for 1-2 minutes.  
What happened ?  
Did the sugar disappear?  
Write your observation in 4-5 lines?
4. Take the above solution into a small pan.
5. Add a little more water.
6. Heat the mixture gently with the help of an adult.  
Write your observation what happens during heating?

What is the difference you observe in both cases ?

- Q-6. Learn Chapter- 3,4 and Try to fill book exercises.

Class - IV

Sub - Social Science

## Summer Holiday Home Work

### ★ Activity / Home Project

- a. Map Activity : Take a physical outline map of India. Mark any 4 to 5 neighbouring countries or colour the Northern Mountains / Plains / Western Desert.
- b. State Project : Pick a state from the Northern Mountains or Southern Plateau (e.g., Himachal Pradesh or Kerala) on an A4-size sheet, stick pictures of the state's traditional dresses, famous monuments, and local food.
- c. Landforms 3D Model : Using thermocol or a cardboard box, create a 3D model of a physical division, such as a mountain, a plateau, or an island. Use clay, paints, or small pebbles to make it look realistic.





## WRITING SECTION

Ques1. What are Plains? Describe the extent of the Northern Plain.

Ques2. Name any two tourist attractions of Delhi and Uttar Pradesh.

Ques3. Name any five major tourist attractions of the Great Indian desert region.

Ques4. The Indira Gandhi Canal is of great significance to the state of Rajasthan. Explain.

Ques5. How do the rivers of the Northern Plain make the land fertile?

Ques6. Name any six tributaries of the River Ganga.



Learning based :

Ch-3 The Northern Plains

Ch-4 The Desert (Western Desert)

Read these chapters and do their exercises.



# GENERAL KNOWLEDGE

## Worksheet – 1

- Make the list of popular festivals celebrated in India from any 10 states.
- Write five lines about our Constitution.
- Write the name of any 20 countries with their capitals.

## Worksheet – 2

- Paste pictures of Indian historical places with their names, location, and year of construction.

## Worksheet – 3

- Air Force Day is celebrated on \_\_\_\_\_.
- Kargil Vijay Diwas is celebrated on \_\_\_\_\_.
- Teachers' Day is celebrated on \_\_\_\_\_.
- National Unity Day is celebrated on \_\_\_\_\_.
- Indian Navy Day is celebrated on \_\_\_\_\_.

## Worksheet – 4

- Write the names of any 10 rivers of India.
- Write five lines about Dr. B. R. Ambedkar.
- Write the names of 10 neighbouring countries of India.

## Worksheet – 5

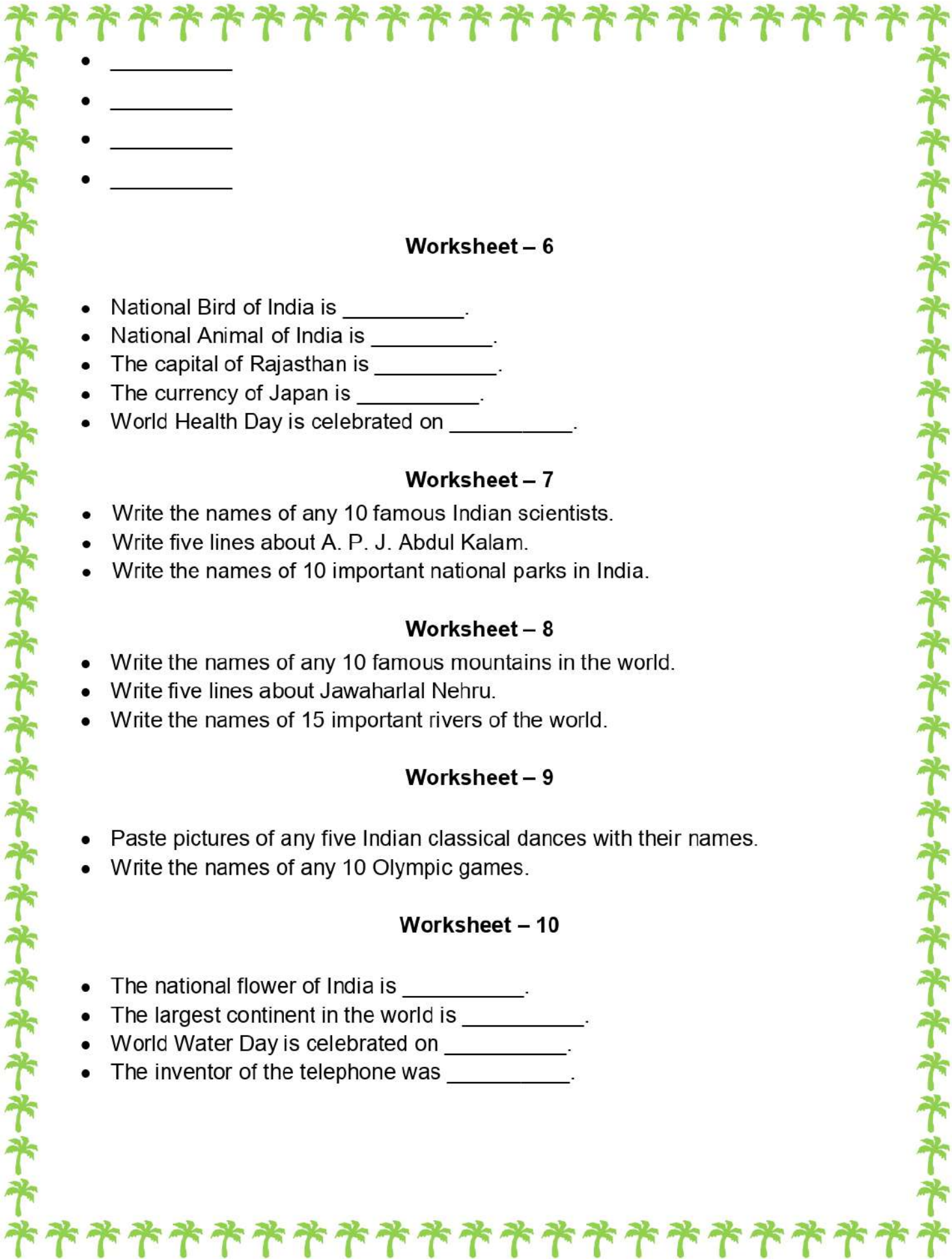
- Paste pictures of any five Indian monuments with their names.

Fill the names of planets and their order from the Sun.

Planet

Order

- \_\_\_\_\_
- \_\_\_\_\_
- \_\_\_\_\_
- \_\_\_\_\_

- 
- \_\_\_\_\_
  - \_\_\_\_\_
  - \_\_\_\_\_
  - \_\_\_\_\_

### Worksheet – 6

- National Bird of India is \_\_\_\_\_.
- National Animal of India is \_\_\_\_\_.
- The capital of Rajasthan is \_\_\_\_\_.
- The currency of Japan is \_\_\_\_\_.
- World Health Day is celebrated on \_\_\_\_\_.

### Worksheet – 7

- Write the names of any 10 famous Indian scientists.
- Write five lines about A. P. J. Abdul Kalam.
- Write the names of 10 important national parks in India.

### Worksheet – 8

- Write the names of any 10 famous mountains in the world.
- Write five lines about Jawaharlal Nehru.
- Write the names of 15 important rivers of the world.

### Worksheet – 9

- Paste pictures of any five Indian classical dances with their names.
- Write the names of any 10 Olympic games.

### Worksheet – 10

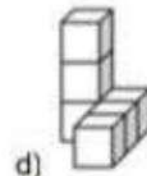
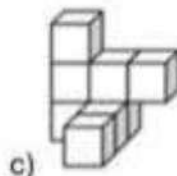
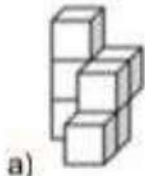
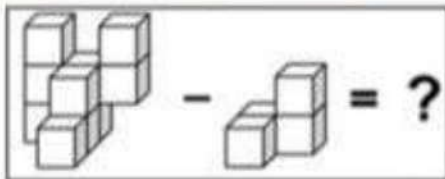
- The national flower of India is \_\_\_\_\_.
- The largest continent in the world is \_\_\_\_\_.
- World Water Day is celebrated on \_\_\_\_\_.
- The inventor of the telephone was \_\_\_\_\_.

# **SUBJECT: COMPUTER**

- **Prepare a 10-line speech on artificial intelligence or roboethics.**
- **Make a poster on cyber ethics rules.**
- **Make a working model on robot. (roll no. 1 to 15)**
- **Prepare a script on any game in scratch in your mobile phone.**
- **Make a working model on shortcut keys.(roll no. 16 to 31)**
- **Make a tabular chart for different types of computer memory.**





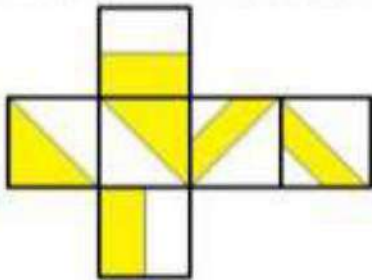
1. What will come in place of "?"

Note: You cannot rotate the images



2. The figure below forms a cube when folded. Which of the following options represents a pair of opposite faces of the cube?

Note: You cannot rotate the question or option images



3. From a rectangular piece of paper, a shape having which of the following number of angles CANNOT be formed by making only a SINGLE STRAIGHT CUT in any direction?

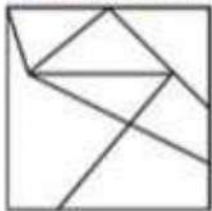
a) 3 angles

b) 4 angles

c) 5 angles

d) 6 angles

4. Count the number of TRIANGLES in the image given below.



a) 4

b) 5

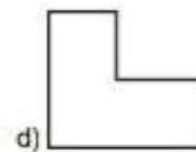
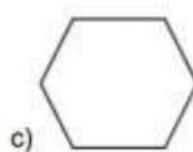
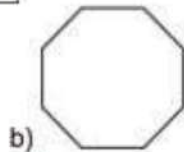
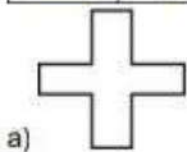

c) 3

d) 2

5. Find the ODD one out.



6. If each of the given terms follows the same theme, what will come in place of "?"



7. Each face of a triangular prism is coloured with a colour in such a way that no two adjacent faces have the same colour. What is the MINIMUM number of colours required to do this?

Note: Two faces are said to be adjacent if they share a common edge

a) 2


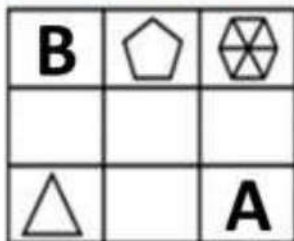
b) 3

c) 4

d) 5

8. Which of these shapes will come in place of A and B, such that no two shapes having the same number of sides, pattern, or colour appear in the same row or column?

Note: Not all blocks will necessarily have a shape present in them



9. Six concrete blocks of cubical shape are used for building the stairs as shown below. How many faces of these blocks are not visible?



a) 12

b) 15

c) 21

d) 24